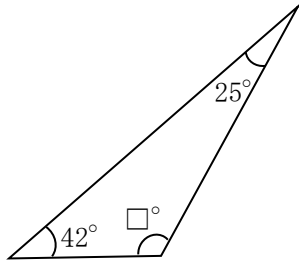


<b>5年</b> <b>16</b> <b>(1)</b>	<b>内角の和、角柱、円</b>	____年 ____組
		名前

1 次の図形の□にあてはまる数を求めましょう。

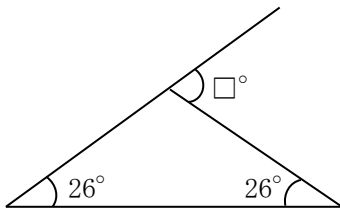
①



式  $180 - (42 + 25) = 113$

答え ( 113 )

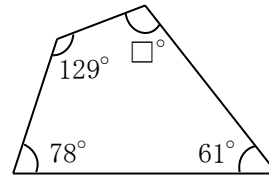
②



式  $26 + 26 = 52$

答え ( 52 )

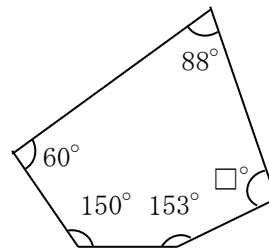
③



式  $360 - (129 + 78 + 61)$   
 $= 360 - 268$   
 $= 92$

答え ( 92 )

④



式  $540 - (88 + 60 + 150 + 153)$   
 $= 540 - 451$   
 $= 89$

答え ( 89 )